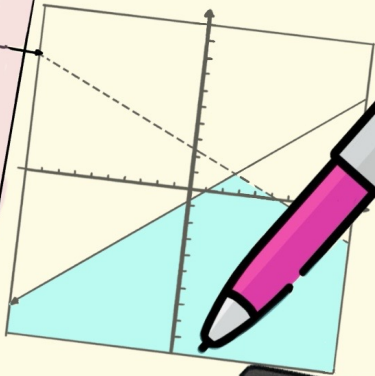
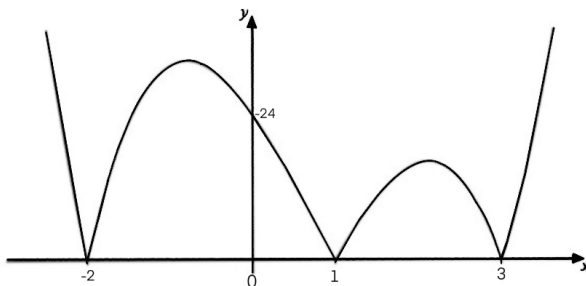


Equations, Inequality and graph



Chapter 4 - Equations, Inequality and Graphs

1. (a)



The diagram shows the graph of $y = |f(x)|$, where $f(x)$ is a cubic. Find the possible expressions for $f(x)$.

$$f(x) = 4(x+2)(x-1)(x-3)$$

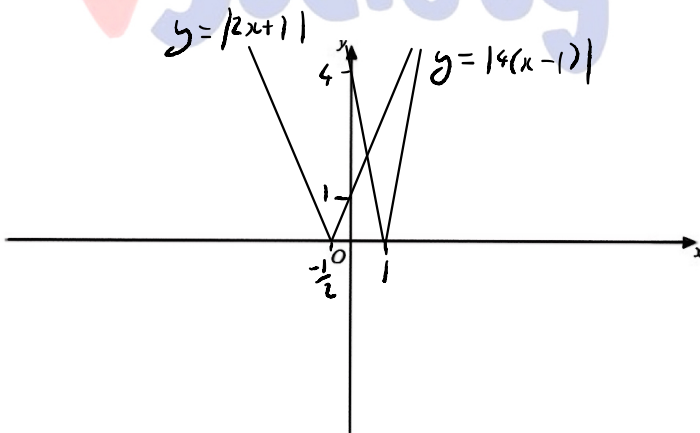
[3]

or

$$f(x) = -4(x+2)(x-1)(x-3)$$

(b) (i) On the axes below, sketch the graph of $y = |2x + 1|$ and the graph of $y = |4(x - 1)|$, stating the coordinates of the points where the graphs meet the coordinate axes.

[3]



(ii) Find the exact solutions of the equation $|2x + 1| = |4(x - 1)|$.

[4]

$$(2x + 1)^2 = 16(x - 1)^2$$

$$4x^2 + 4x + 1 = 16(x^2 - 2x + 1)$$

$$4x^2 + 4x + 1 = 16x^2 - 32x + 16$$

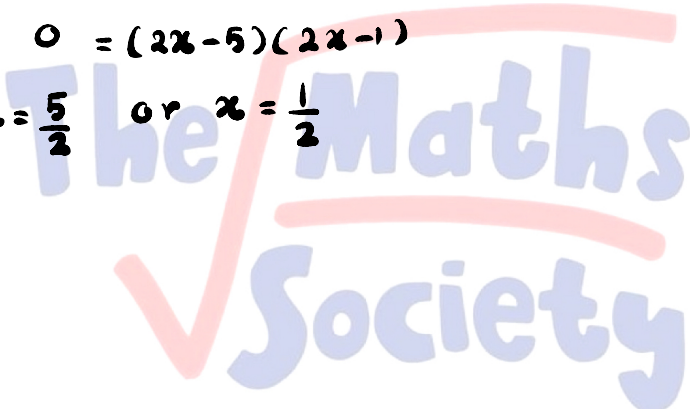
$$0 = 12x^2 - 36x + 15$$

$$(\div 3) \quad 0 = 4x^2 - 12x + 5$$

$$0 = (2x - 5)(2x - 1)$$

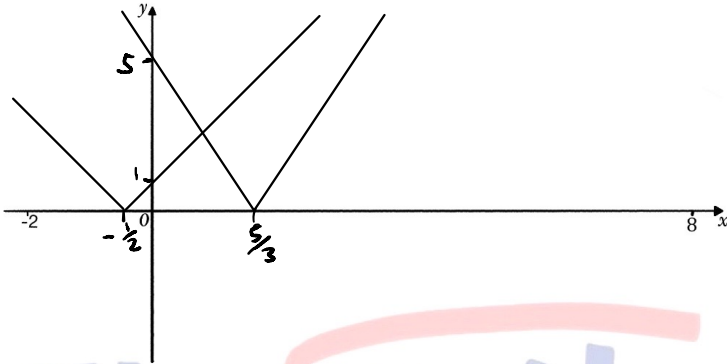
$$x = \frac{5}{2} \quad \text{or} \quad x = \frac{1}{2}$$

$$\begin{array}{r} 2x \quad - \quad 5 \quad 10x \\ \times \quad 2x \quad - \quad 1 \quad 2x \\ \hline \end{array}$$



2. (a) On the axes, sketch the graph of $y = |2x + 1|$ and $y = |5 - 3x|$ for $-2 \leq x \leq 8$. State the coordinates of the points where these graphs meet the coordinate axes.

[3]



- (b) Solve the equation $|2x + 1| = |5 - 3x|$.

[3]

$$\begin{aligned}
 (2x+1)^2 &= (5-3x)^2 \\
 4x^2 + 4x + 1 &= 25 - 30x + 9x^2 \\
 0 &= 5x^2 - 34x + 24 \\
 0 &= (x-6)(5x-4) \\
 x &= 6 \quad \text{or} \quad x = \frac{4}{5}
 \end{aligned}$$

$$\begin{array}{r}
 1x \quad - \quad 6 \quad - \quad 30x \\
 5x \quad - \quad 4 \quad - \quad 4x \\
 \hline
 24 = 1 \times 24 \\
 = 2 \times 12 \\
 = 3 \times 8 \\
 = 4 \times 6
 \end{array}$$